

Date: \_\_\_\_\_

**Practice 4 Simple addition**

1 Add the numbers by counting on.

**Example**

$73 + 4 = 77$

$73, 74, \underline{75}$   
 $76, \underline{77}$



a  $85 + 3 =$  \_\_\_\_\_

85, \_\_\_\_\_, \_\_\_\_\_, \_\_\_\_\_



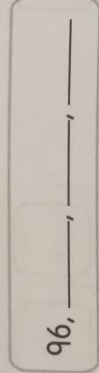
b  $62 + 6 =$  \_\_\_\_\_

62, \_\_\_\_\_, \_\_\_\_\_, \_\_\_\_\_



c  $96 + 3 =$  \_\_\_\_\_

96, \_\_\_\_\_, \_\_\_\_\_, \_\_\_\_\_



2 Add the numbers.

a  $\begin{array}{r} 5 \\ + 3 \\ \hline \end{array}$

\_\_\_\_\_

b  $\begin{array}{r} 6 \\ + 2 \\ \hline \end{array}$

\_\_\_\_\_

c  $\begin{array}{r} 8 \\ + 3 \\ \hline \end{array}$

\_\_\_\_\_

d  $\begin{array}{r} 4 \\ + 4 \\ \hline \end{array}$

\_\_\_\_\_

e  $\begin{array}{r} 2 \\ + 6 \\ \hline \end{array}$

\_\_\_\_\_

f  $\begin{array}{r} 4 \\ + 7 \\ \hline \end{array}$

\_\_\_\_\_

g  $5 + 82 =$  \_\_\_\_\_

5	8	2
+	8	2
<hr/>		

h  $93 + 2 =$  \_\_\_\_\_

9	3	2
+	0	2
<hr/>		

3 Add the numbers.

a 
$$\begin{array}{r} 4 & 0 \\ + & 5 & 0 \\ \hline \end{array}$$

c 
$$\begin{array}{r} 3 & 7 \\ + & 4 & 0 \\ \hline \end{array}$$

e 
$$\begin{array}{r} 6 & 3 \\ + & 2 & 4 \\ \hline \end{array}$$

g  $56 + 23 =$ 


 + 


 =



b 
$$\begin{array}{r} 6 & 0 \\ + & 2 & 3 \\ \hline \end{array}$$

d 
$$\begin{array}{r} 5 & 3 \\ + & 4 & 5 \\ \hline \end{array}$$


f 
$$\begin{array}{r} 4 & 7 \\ + & 1 & 2 \\ \hline \end{array}$$

h  $86 + 13 =$ 


 + 


 =

4 Match each cake to the correct child.



•


•

•

•

•

•



Date: \_\_\_\_\_

### Practice 5 More addition

1 Add the numbers.

a 
$$\begin{array}{r} 4 \\ + 8 \\ \hline \end{array}$$

b 
$$\begin{array}{r} 5 \\ + 7 \\ \hline \end{array}$$

c 
$$\begin{array}{r} 7 \\ + 6 \\ \hline \end{array}$$

d 
$$\begin{array}{r} 5 \\ + 9 \\ \hline \end{array}$$

e 
$$\begin{array}{r} 7 \\ + 3 \\ \hline \end{array}$$

f 
$$\begin{array}{r} 5 \\ + 8 \\ \hline \end{array}$$

g  $7 + 66 =$ 


 + 


 = 

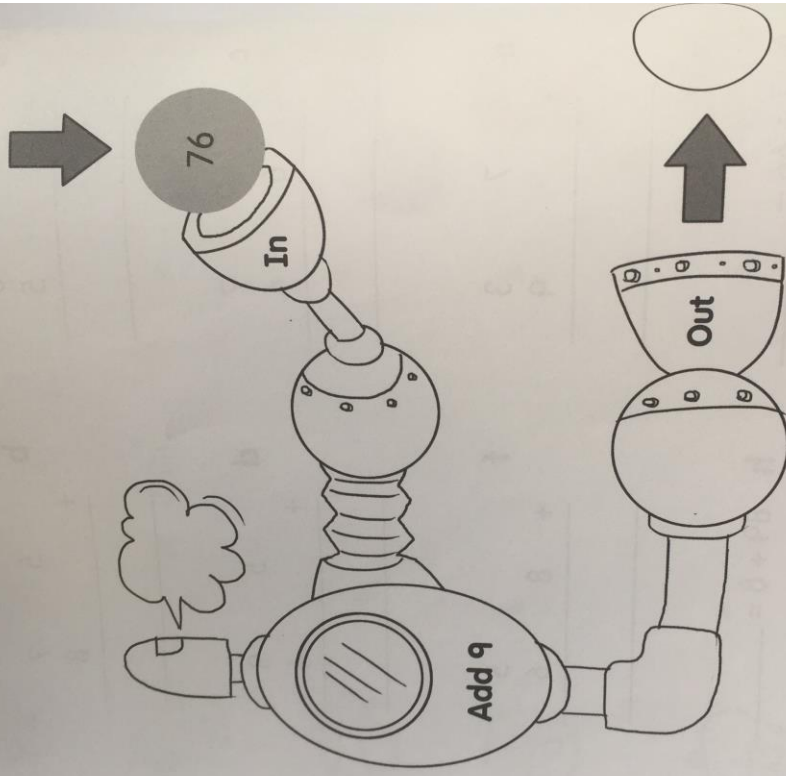

h  $89 + 8 =$ 


 + 


 = 




2 Jack drops a ball into the number machine below.  
What happens to the number on the ball?  
Write the answer in the .



3 Add and regroup.  
Fill in the missing numbers.

a 
$$\begin{array}{r} 2 \quad 7 \\ + 2 \quad 8 \\ \hline \end{array}$$

b 
$$\begin{array}{r} \quad 8 \quad 6 \\ + \quad 1 \quad 4 \\ \hline \end{array}$$

c 
$$\begin{array}{r} 2 \quad 5 \\ + 3 \quad 7 \\ \hline \end{array}$$

d 
$$\begin{array}{r} \quad 4 \quad 4 \\ + \quad 3 \quad 7 \\ \hline \end{array}$$

e 
$$\begin{array}{r} 3 \quad 9 \\ + 2 \quad 1 \\ \hline \end{array}$$

f 
$$\begin{array}{r} \quad 3 \quad 6 \\ + \quad 5 \quad 4 \\ \hline \end{array}$$

g  $19 + 14 =$  
$$\begin{array}{r} \square \quad \square \\ \square \quad \square \\ + \quad \square \quad \square \\ \hline \square \quad \square \\ \square \quad \square \end{array}$$

h  $58 + 36 =$  
$$\begin{array}{r} \square \quad \square \\ \square \quad \square \\ + \quad \square \quad \square \\ \hline \square \quad \square \\ \square \quad \square \end{array}$$



4 Add the numbers.

$52 + 19 =$

$58 + 6 =$

$67 + 18 =$

$48 + 38 =$

$7 + 59 =$

$43 + 57 =$

$27 + 49 =$

$18 + 67 =$

$56 + 35 =$



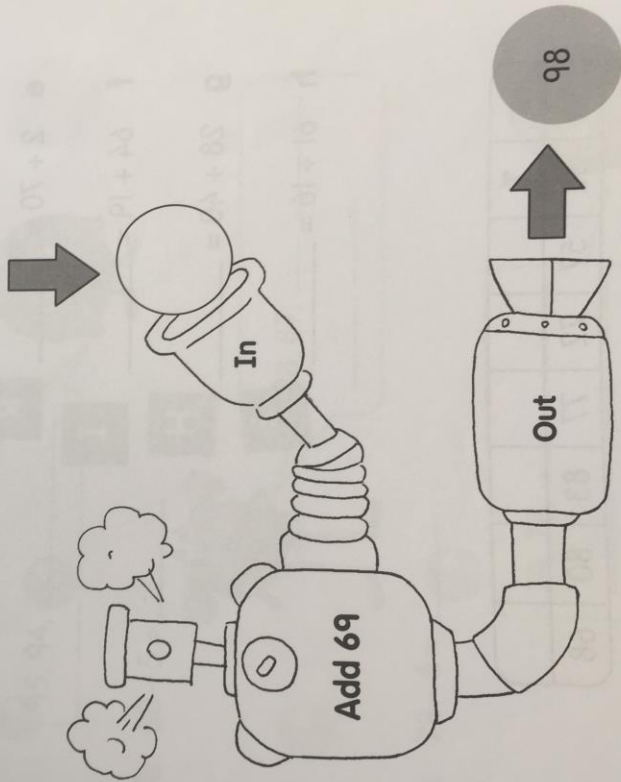
Date: \_\_\_\_\_

### Practice 6 More addition


- 1 Miya drops a ball into the number machine.  
Which number is on the ball?  
Write the number in the ○.



- 39
- 31
- 29



- 2 Find the answer to the joke.  
What fish do you find in space?



- a  $45 + 7 = 52$
- b  $52 + 5 =$  \_\_\_\_\_
- c  $2 + 78 =$  \_\_\_\_\_
- d  $72 + 8 =$  \_\_\_\_\_
- e  $2 + 70 =$  \_\_\_\_\_
- f  $64 + 19 =$  \_\_\_\_\_
- g  $28 + 40 =$  \_\_\_\_\_
- h  $61 + 16 =$  \_\_\_\_\_

T							
80	52	57	72	77	83	80	68